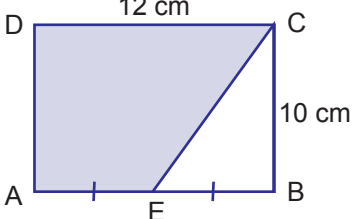
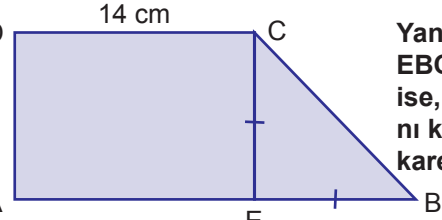
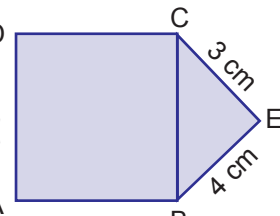
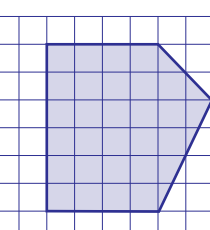
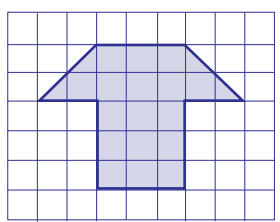


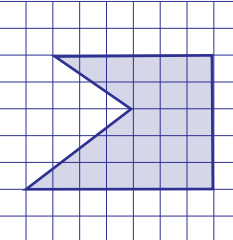
1.  Yandaki şekle göre $|AE|=|EB|$ ise, boyalı şeklin alanı kaç santimetrekaredir?
- A) 120 B) 90 C) 80 D) 60

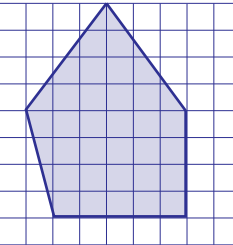
2.  Yandaki şekilde EBC ikizkenar üçgen ise, boyalı şeklin alanı kaç santimetrekaredir?
- A) 140 B) 160 C) 190 D) 240

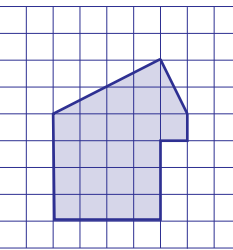
3.  Bir kare ve bir dik üçgenden oluşan boyalı şeklin alanı kaç santimetrekaredir?
- A) 48 B) 44 C) 43 D) 42

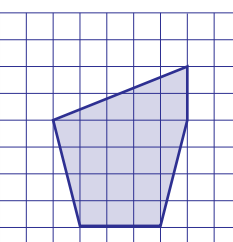
4.  Yandaki boyalı şeklin alanı kaç birimkaredir?
- A) 36 B) 32 C) 30 D) 28

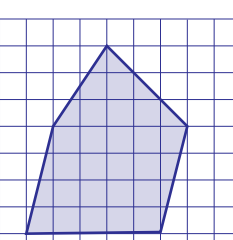
5.  Yandaki boyalı şeklin alanı kaç birimkaredir?
- A) 19 B) 18 C) 17 D) 16

6.  Yandaki boyalı şeklin alanı kaç birimkaredir?
- A) 24 B) 22 C) 20 D) 18

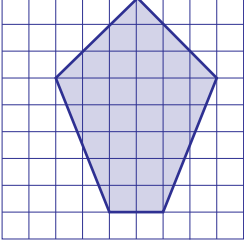
7.  Yandaki boyalı şeklin alanı kaç birimkaredir?
- A) 30 B) 32 C) 34 D) 36

8.  Yandaki boyalı şeklin alanı kaç birimkaredir?
- A) 19 B) 20 C) 21 D) 22

9.  Yandaki boyalı şeklin alanı kaç birimkaredir?
- A) 21 B) 20 C) 19 D) 18

10.  Yandaki boyalı şeklin alanı kaç birimkaredir?
- A) 35 B) 32,5 C) 30 D) 27,5

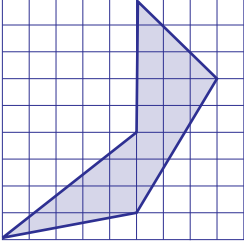
11.



Yandaki boyalı şeklin alanı kaç birimkaredir?

- A) 30 B) 29 C) 28 D) 26

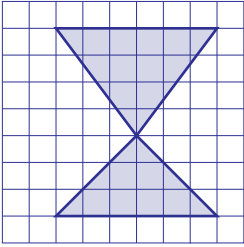
12.



Yandaki boyalı şeklin alanı kaç birimkaredir?

- A) 21 B) 19,5 C) 18 D) 17,5

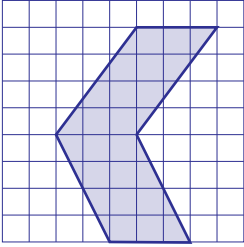
13.



Yandaki boyalı şeklin alanı kaç birimkaredir?

- A) 21 B) 20 C) 19 D) 18

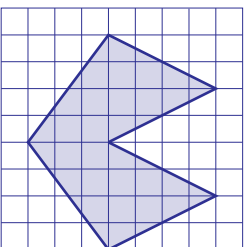
14.



Yandaki boyalı şeklin alanı kaç birimkaredir?

- A) 26 B) 24 C) 22 D) 20

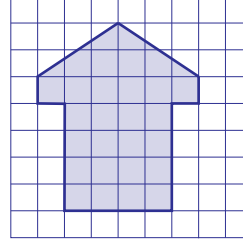
15.



Yandaki boyalı şeklin alanı kaç birimkaredir?

- A) 22 B) 24 C) 26 D) 28

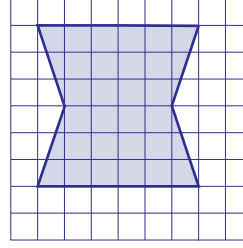
16.



Yandaki boyalı şeklin alanı kaç birimkaredir?

- A) 28 B) 26 C) 24 D) 22

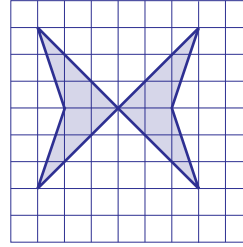
17.



Yandaki boyalı şeklin alanı kaç birimkaredir?

- A) 32 B) 34 C) 36 D) 38

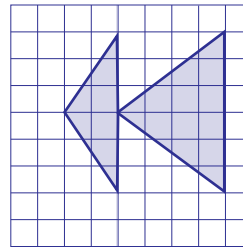
18.



Yandaki boyalı şeklin alanı kaç birimkaredir?

- A) 14 B) 13 C) 12 D) 11

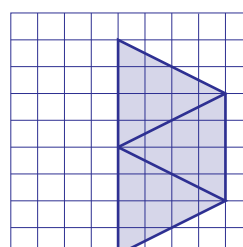
19.



Yandaki boyalı şeklin alanı kaç birimkaredir?

- A) 18 B) 17 C) 16 D) 15

20.



Yandaki boyalı şeklin alanı kaç birimkaredir?

- A) 28 B) 24 C) 22 D) 20